

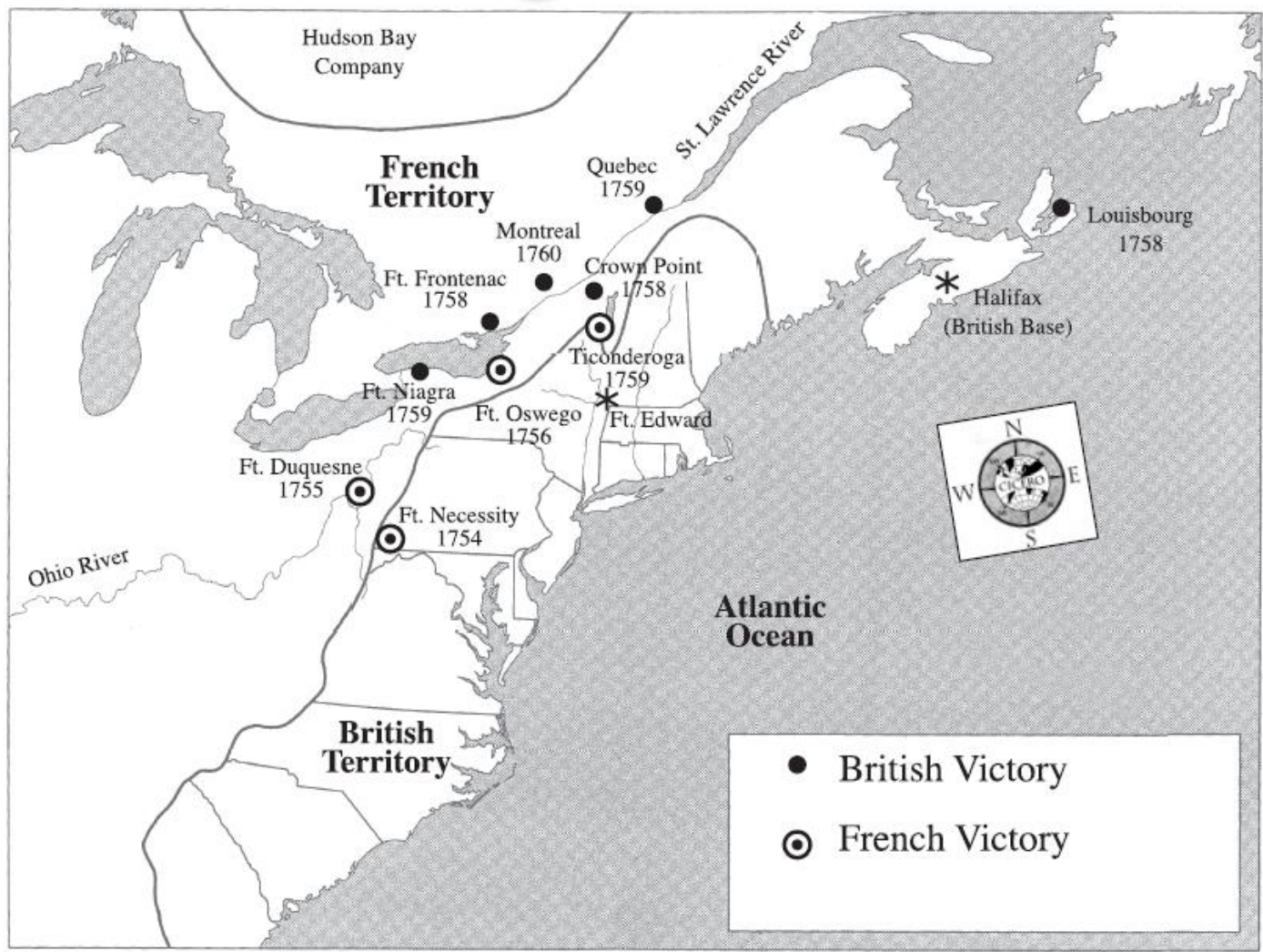
French & Indian War

Geography Activity

20pts

Name: _____

Period: _____



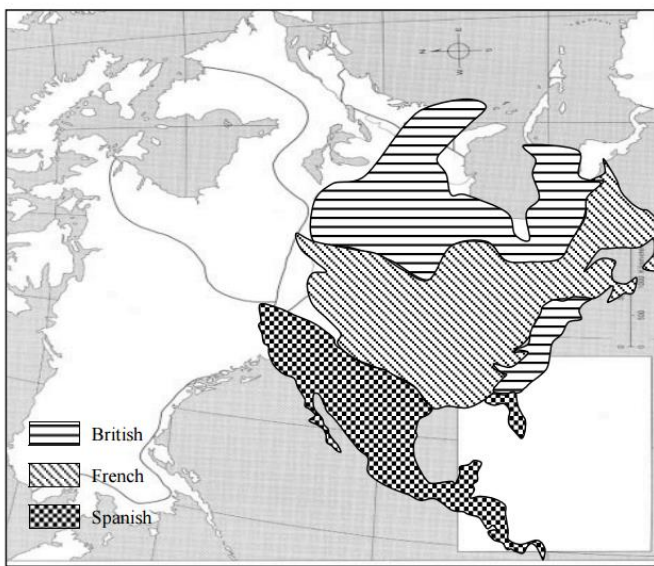
Use the information provided on the map to answer the following questions.

1. During what years did the French and Indian War take place? _____
2. What two European countries were at war? _____
3. According to the map, which country had the most victories? How many? _____
4. In what years did the following battles take place?
Fort Necessity _____ Montreal _____
Fort Niagara _____ Quebec _____
5. Quebec and Montreal are located along what river? _____
6. The British captured what important base southwest of Louisbourg? _____

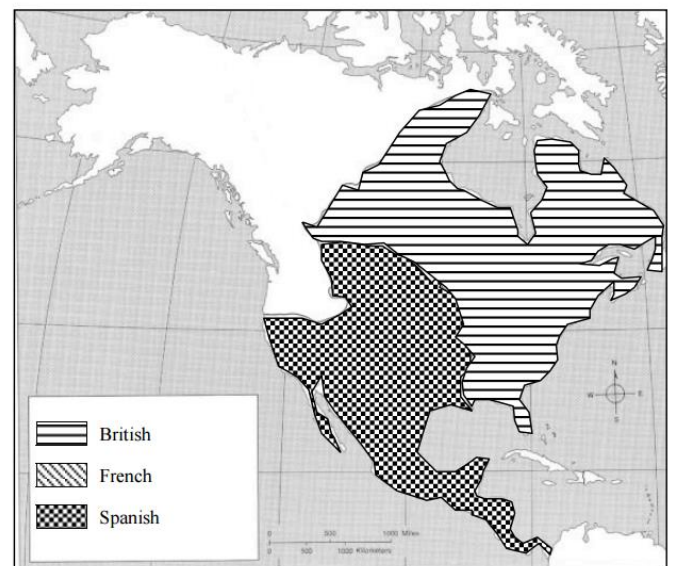
7. What river was located in French territory just south of the Great Lakes? _____
 8. What ocean marked the eastern boundary of the British colonies? _____
 9. Fort Niagara was located in which country's territory? _____
 10. According to the map, the last battle of the French and Indian War occurred in 1760. Where did this battle occur?
-

CONSEQUENCES

European Land Claims in North America, 1753



European Land Claims in North America, 1763



The French and Indian War in North America began in 1754 and ended with the signing of the Treaty of Paris in 1763. Interpret the maps above to determine how the French and Indian War impacted European land claims in North America.

1. Which map shows land claims by European countries prior to the French and Indian War?
2. Which nation(s) gained land in North America between 1754 and 1763?
3. Which nation(s) lost land in North America between 1754 and 1763?
4. Compare the two maps. What effect did the Treaty of Paris have on French power in North America?