

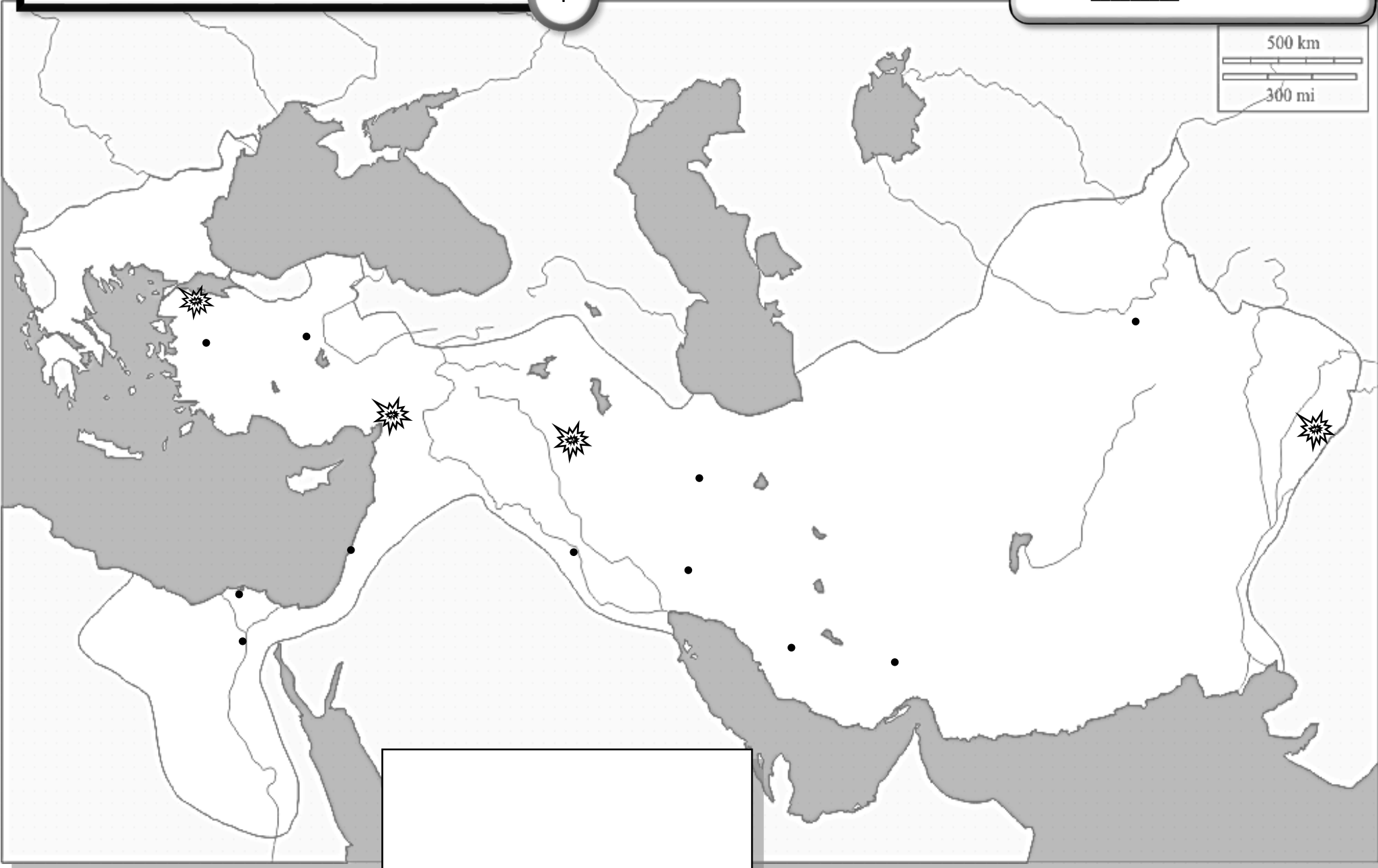
Alexander the Great's Empire

Geography Activity

35pts

Name: _____

Period: _____



DIRECTIONS

Label the following geographical features on the map (use page 144 in your textbook OR use the maps on the weebly)

Key Waterways & Land Features

Aegean Sea	Amu Darya River	Desert of Gedrosia
Aral Sea	Danube River	Arabian Desert
Black Sea	Euphrates River	Libyan Desert
Ionian Sea	Indus River	Hindu Kush Mnts.
Mediterranean Sea	Nile River	Caucasus Mnts.
Persian Gulf	Tigris River	Zagros Mnts.
Red Sea		Tarsus Mnts.


OUTLINE all rivers in BLUE!

Key Cities

Alexandria²
 Babylon
 Bactra
 Ecbatana
 Memphis
 Persepolis
 Sardis
 Susa
 Ancyra
 Tyre

Tracing & Coloring Major Events & Regions


Trace onto the map the route of conquest followed by Alexander

Where the  is shown find & label the following major battles at their correct location:

- ❖ Battle of Granicus (334 B.C.)
- ❖ Battle of Issus (333 B.C.)
- ❖ Battle of Guagamela (331 B.C.)
- ❖ Battle of Hydaspes (326 B.C.)

Lightly color the extent of area conquered by Alexander

Make a map key in the blank box that will include:

- ❖ symbol for cities
- ❖ symbol for battles 
- ❖ symbol for Alexander's route of conquest
- ❖ symbol for extent of his Empire